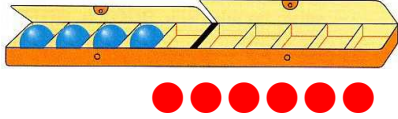


$2+1=$



Les compléments à 10

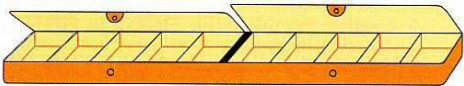
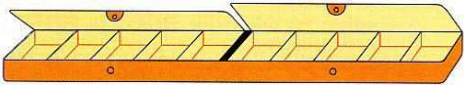
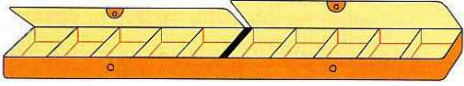
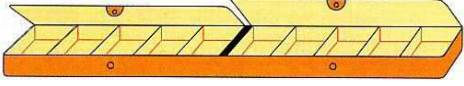


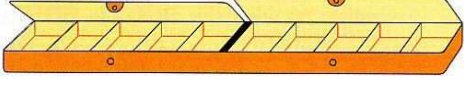
Observe bien cet exemple.



J'ai 4 billes dans ma boîte.
Pour la remplir je dois rajouter 6 billes

$4 + \boxed{6} = 10$

A ton tour ! (Tu peux remplir les boites si tu le veux.)

$6 + \dots = 10$	
$2 + \dots = 10$	
$8 + \dots = 10$	
$3 + \dots = 10$	
$7 + \dots = 10$	
$9 + \dots = 10$	
$5 + \dots = 10$	
$1 + \dots = 10$	